

PUSHPA BHARTI PUBLIC SCHOOL
CLASS-IIND SUB-MATHS
SAMPLE PAPER

Time=2:30hr

M.M=80

NAME ROLL NO SECTION

Q1. Write the number name :- (2)

(i) 563 = (ii) 364 =

Q2. Write the number of days in the months :- (5)

(i) One week

(ii) April

(iii) January

(iv) September

(v) March

Q3. Write the numbers in ascending order :- (4)

(i) 284, 444, 612, 877

(ii) 342, 282, 188, 882

Q4. Write the numbers in descending order :- (4)

(i) 268, 376, 598, 378

(ii) 405, 105, 648, 26


Q5. Put the correct sign > or < (2)

(i) 389 365


(ii) 333 468

Q6. Match the following :-


(5)



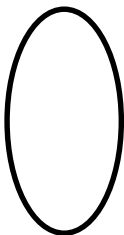
Oval



Square



Triangle



Rectangle



Circle

Q7. Add the following :-

(4)

(1) 8 kg 540 g
+6 kg 300 g

(2) 12 kg 125 kg
+72 kg 472 kg

Q8. Subtract the following :-

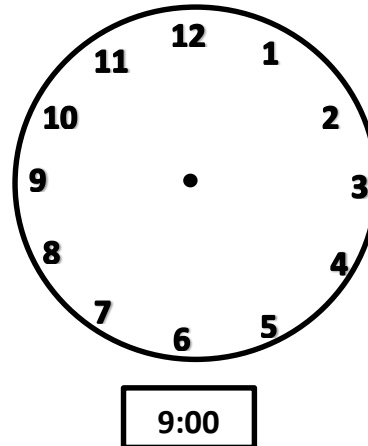
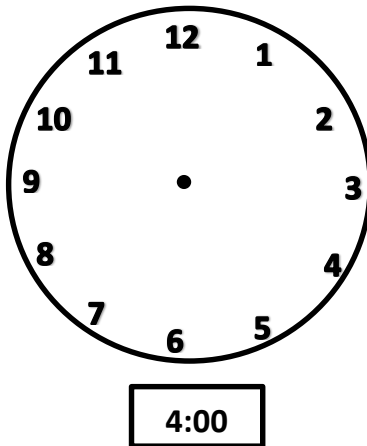
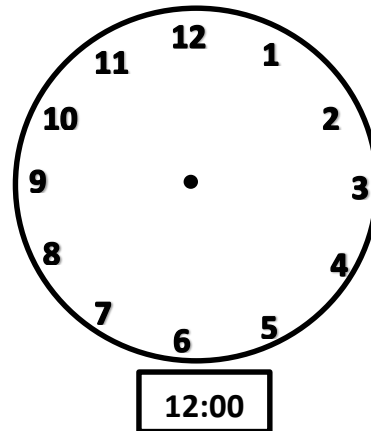
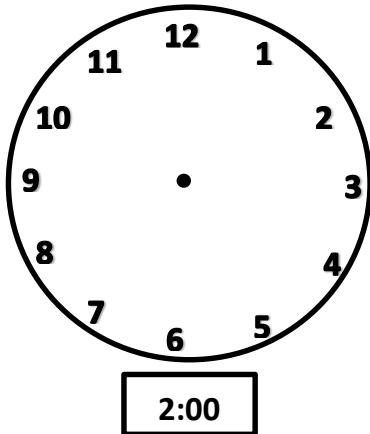
(10)

(1) 74 kg 300 g
-54 kg 100 g

(2) 395 kg 378 g
-220 kg 228 g

Q9. Show the time :-

(4)



Q10. Multiply the following :-

(4)

$$\begin{array}{r} (1) \ 246 \\ \times 2 \\ \hline \end{array}$$

$$\begin{array}{r} (2) \ 164 \\ \times 3 \\ \hline \end{array}$$

Q11. Divide the following :-

(4)

$$(1) \ 12 \overline{) 108} \quad (2) \ 5 \overline{) 45}$$

Q12. Word Problems :-

(20)

- (1) A week has 7 days. How many weeks will have 56 days.
- (2) A Tricycle needs 3 Wheels. How many Wheels will be needed for 136 Tricycles.
- (3) There are 386 Apples trees and 405 Mangoes trees and 136 Oranges tree. How many tress are there in all.
- (4) Raman is 189 cm tall and Kratik is 99 cm tall . What is the difference between their heights.

Q13. Write the Missing numbers :-

(2)

(1) 324 327

(2) 675 678

Q14. Write next 20 numbers in descending order :-

(4)

875	874	<input type="text"/>	<input type="text"/>	<input type="text"/>	<input type="text"/>	<input type="text"/>	<input type="text"/>	<input type="text"/>	<input type="text"/>
<input type="text"/>	<input type="text"/>	<input type="text"/>	<input type="text"/>	<input type="text"/>	<input type="text"/>	<input type="text"/>	<input type="text"/>	<input type="text"/>	<input type="text"/>

Q15. Convert into cm

(4)

(1) 8m 80cm (2) 2m 100cm

Q16. Convert into Pasie

(4)

(1) ₹ 7 (2) ₹ 5

Q17. Convert into ml

(4)

(1) 3 lit (2) 8 lit